


Fishy Mathematics


Let's learn the Equal, Less & Greater Than Symbols

Count the fish in the fishbowls and write down the correct number.
Then, compare the number and write $>$, $<$ or $=$ to show which fishbowl
has more, less, or equal number of fish.


1.




—




2.



—



3.



—

