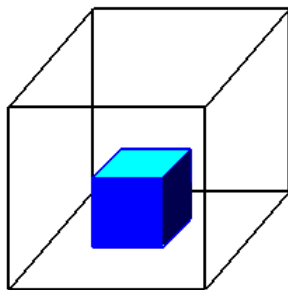


## States of Matter

OC1 name three states of matter and know their characteristics

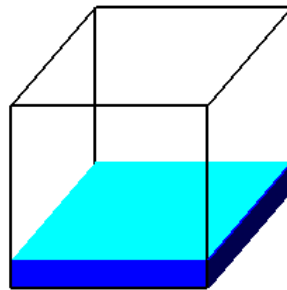


## *States of Matter*



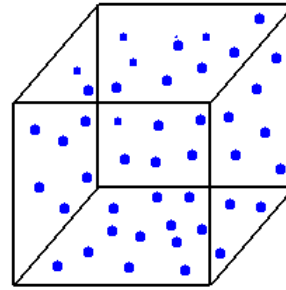
**Solid**

Holds Shape  
Fixed Volume



**Liquid**

Shape of Container  
Free Surface  
Fixed Volume



**Gas**

Shape of Container  
Volume of Container