

Name: _____

Date: _____

Grade and Section: _____

Score: _____

Puzzle It: Area & Perimeter


Meow Meow Cat Cafe

Kate wants to build a cat cafe for her cats. Each cat needs a different sized cat bed. Compute the area and perimeter for each cat bed to help her choose one. Meow when you're finished to win a prize!




H: 9 ft W: 6 ft

Area:
Perimeter:




H: 9 ft W: 8 ft

Area:
Perimeter:




H: 7 ft W: 4 ft

Area:
Perimeter:




H: 8 ft W: 8ft

Area:
Perimeter:



H: 2 ft W: 4ft

Area:
Perimeter:



H: 12 ft W: 12ft

Area:
Perimeter: