

Fishy Mathematics

Let's learn the Equal, Less & Greater Than Symbols

Name:


Date:

Section:


Score:

Count the fish in the fishbowls and write down the correct number. Then, compare the number and write $>$, $<$ or $=$ to show which fishbowl has more, less, or equal number of fish.


1.




—




2.



—



3.



—

