








# MATH EXERCISE








## SNAKES, SKIP COUNTING, & MISSING NUMBERS








The snakes are missing some numbers! Fill in the blanks with the correct answer. Make sure you count by 2s, 3s, 5s, and 10s.








NAME: \_\_\_\_\_  
SECTION: \_\_\_\_\_

DATE: \_\_\_\_\_  
SCORE: \_\_\_\_\_

						
<u>2</u>	<u>        </u>	<u>6</u>	<u>        </u>	<u>        </u>	<u>12</u>	<u>        </u>

						
<u>3</u>	<u>        </u>	<u>        </u>	<u>12</u>	<u>        </u>	<u>18</u>	<u>        </u>

						
<u>        </u>	<u>10</u>	<u>        </u>	<u>20</u>	<u>        </u>	<u>        </u>	<u>35</u>

						
<u>        </u>	<u>        </u>	<u>        </u>	<u>40</u>	<u>        </u>	<u>60</u>	<u>        </u>